



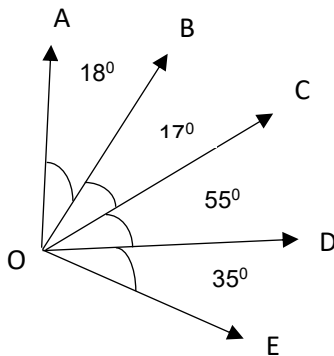
STANDARD 6TH: CHAPTER 2

Angles

Q.1 Classify following angles

- a) 73° b) 125° c) 18° d) 90° e) 94° f) 272°

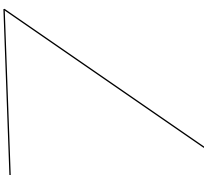
Q.2 Find all acute, right, obtuse \angle s




Q.3 Which type of angle is formed between hour hand & minute hand at 4 O'clock)

Q.4 Which of the following fig. has obtuse angle?

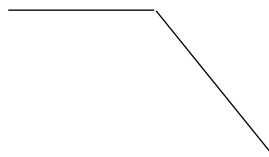
(a)



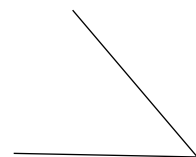
(b)



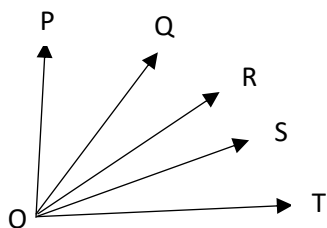
(c)



(d)



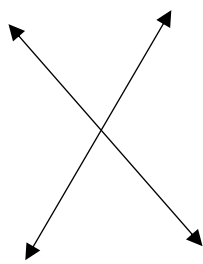
Q.5 How many angle use in given figure?



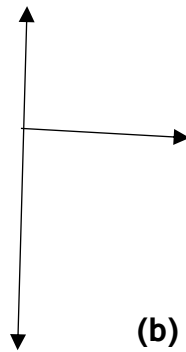
POQ, POR, POS, POT, QOR, QOS, QOT, ROS, ROT, SOT

Q.6 What's angle made between stretched thumb & index finger?

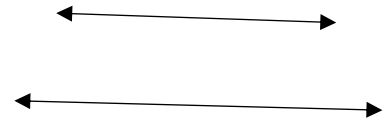
Q.7 In which of given fig. Lines are perpendicular?



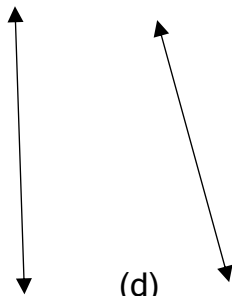
(a)



(b)



(c)



(d)

Q.8 In which of following english letters do you find perpendicular lines?

- a) U b) V c) T d) B